

Count Faces on 3D Shapes

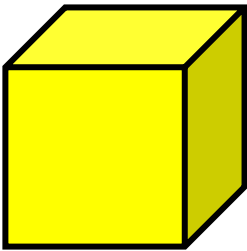
1 Complete the sentences to describe the 3D shapes.



This shape is a

It has


faces.



This shape is a

It has

faces.



This shape is a

It has

faces.




This shape is a

It has


faces.

Count Faces on 3D Shapes

② Count the number of faces on each shape.



Number of faces:



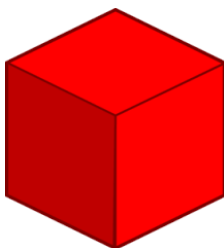
Number of faces:



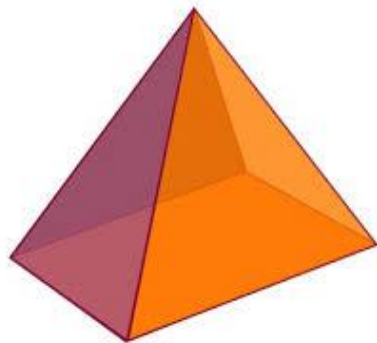
Number of faces:



Number of faces:



Number of faces:



Number of faces:

Count Faces on 3D Shapes

3 Count the number of faces on each shape.



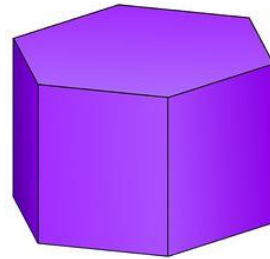
Number of faces:



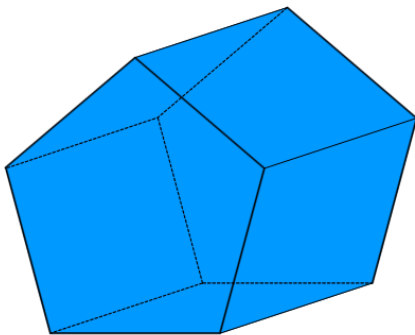
Number of faces:



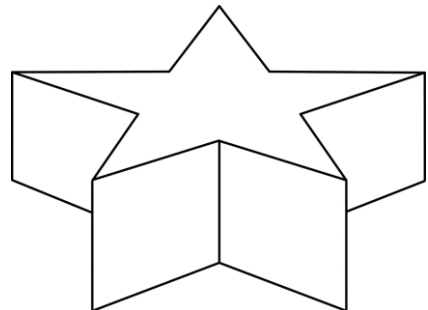
Number of faces:



Number of faces:



Number of faces:



Number of faces: